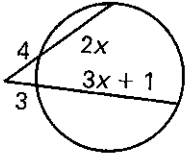


Math II
6.6 Worksheet

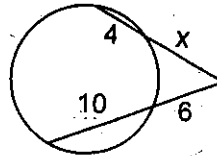
Name _____

Set up an equation and solve for x . Give the exact answer and approximate to the nearest tenth.

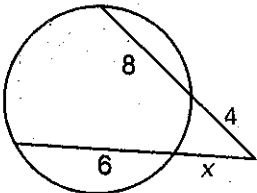
1. $x =$ _____



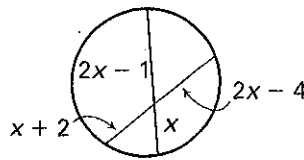
2. $x =$ _____



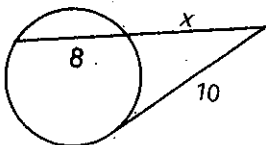
3. $x =$ _____



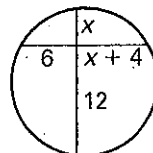
4. $x =$ _____



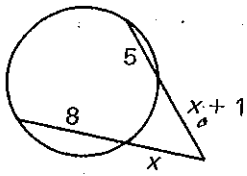
5. $x =$ _____



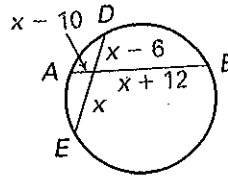
6. $x =$ _____



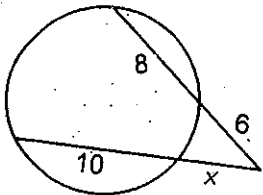
7. $x =$ _____



8. $x =$ _____



9. $x =$ _____



10. $x =$ _____

