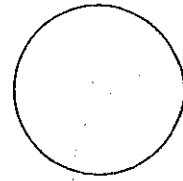
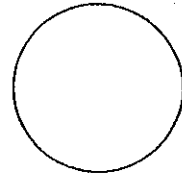


11.4 Circumference and Arc Length

Circumference-



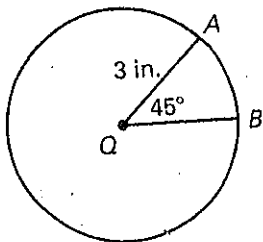
Arc Length-



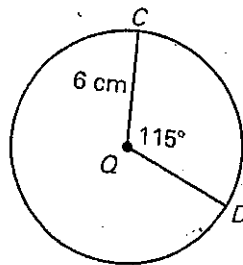
Measure of Arc Length-

Find the indicated arclength

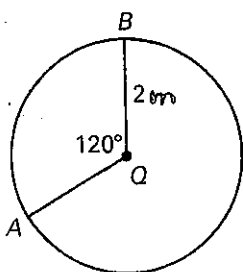
1. Length of \widehat{AB}



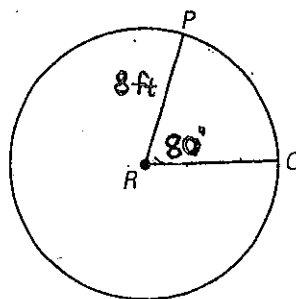
2. Length of \widehat{CD}



3. Length of \widehat{AB}

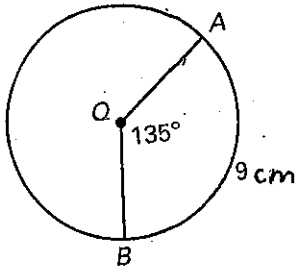


4. Length of \widehat{PQ}

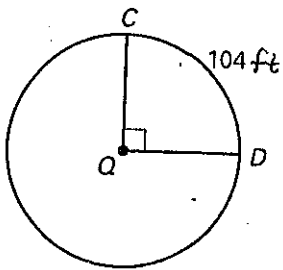


Find the indicated measure

5. Circumference



6. Radius



7. $m\widehat{PQ}$

