

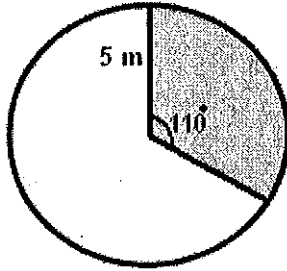
Student Name: _____

Score: _____

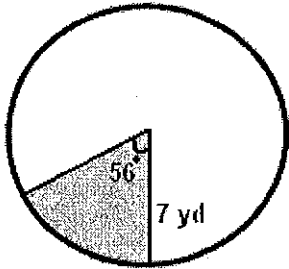
Length of the Arc Worksheet

Find the length of the arc of each circle. Round your answers to the nearest hundredth:

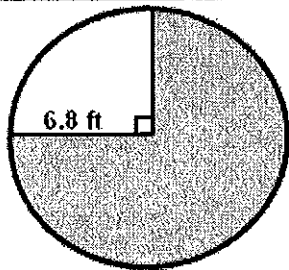
Work Space



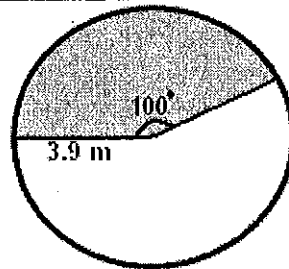
Length of the arc = _____



Length of the arc = _____



Length of the arc = _____



Length of the arc = _____